


Money: Coins

Name _____

Match the prices on the objects to the correct coins.




£1




20p



£2



10p



5p



50p



1p



2p

